


Dinosaur Subtraction


Write the answers in the circles.



-

1

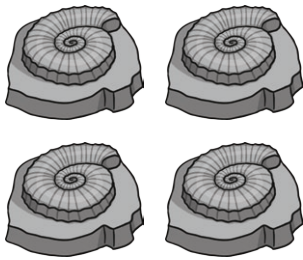

=



-

2



=



-

1



=



-

1



=



-

3


=



-

2

=



Dinosaur Subtraction Answers

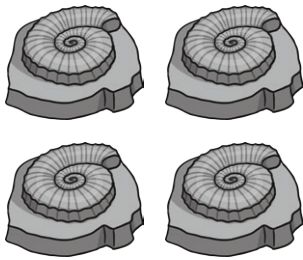
Write the answers in the circles.




$$- 1 = \textcircled{1}$$




$$- 2 = \textcircled{1}$$




$$- 1 = \textcircled{3}$$



$$- 1 = \textcircled{2}$$



$$- 3 = \textcircled{1}$$



$$- 2 = \textcircled{0}$$